

Assignment : 2 Date: 15/12/20 Subject: Mathematics

Class: 1

Teacher: Kalpana Bawa

Lesson5: Shapes and Patterns

Topic : Shapes

Q1: Name different shapes:



This plane shape is called a **square**

It has **four** sides and **four** corners.

All the **sides** are **equal**.



This plane shape is called a **triangle**.

It has **three** sides and **three** corners.



This plane shape is called a **circle**.

It has **no** sides and **no** corners



This plane shape is called a **rectangle**.

It has **four** sides and **four** corners.

It's two **opposite** sides are **equal**.















This plane shape is called an **oval**.

It has **no** sides and **no** corners

Q2:

Circle the correct answer for each of the followings.

		
Rectangle / Circle / Triangle	Rectangle / Circle / Square	Square / Circle / Triangle
		
Circle / Rectangle / Triangle	Rectangle / Square / Circle	Square / Circle / Rectangle
		
Triangle / Rectangle / Circle	Circle / Rectangle / Triangle	Square / Triangle / Rectangle
		
Circle / Rectangle / Triangle	Square / Rectangle / Circle	Square / Circle / Triangle